

## Laboratory Safety Questions

What is incorrect in the following lab scenarios shown below? How could the potential hazard be avoided? Write a brief **statement** about the scenario and explain what should have been done to avoid the hazard.

1.

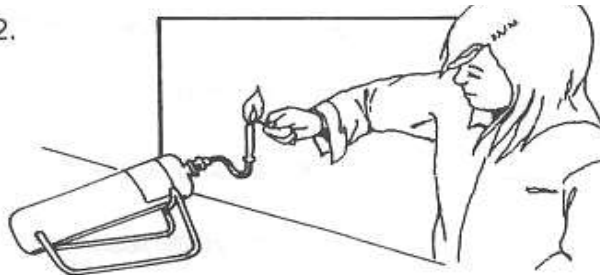


---

---

---

2.

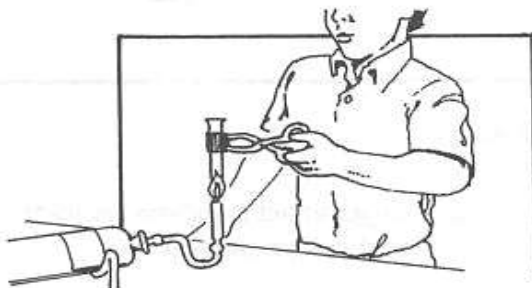


---

---

---

3.

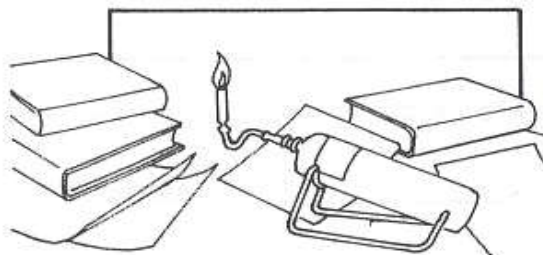


---

---

---

4.




---

---

---

5.



---

---

---

6.



---

---

---